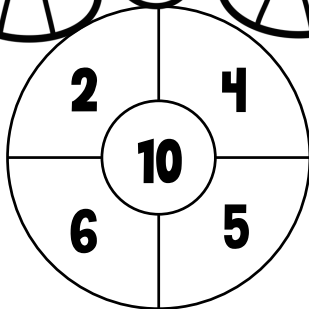
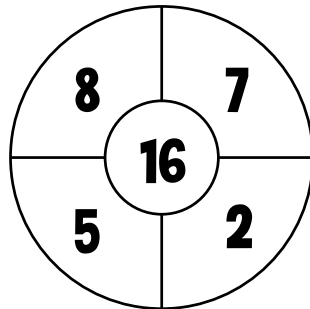


Strzał w dziesiątkę!

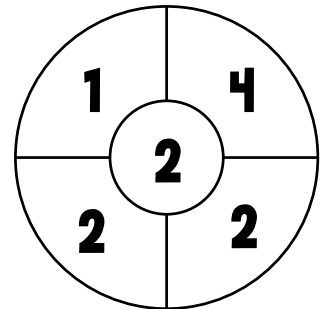
Pokoloruj pola z dwoma liczbami, które pomnożone przez siebie dadzą wynik zapisany na środku. Uzupełnij działania.



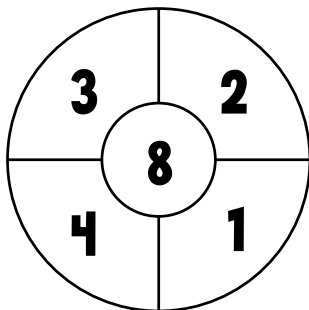
$$\underline{\quad} \times \underline{\quad} = \underline{\quad}$$



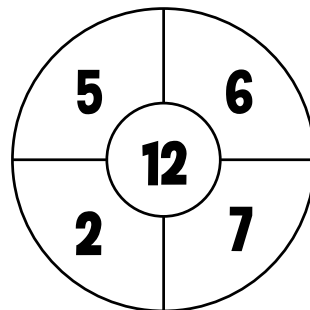
$$\underline{\quad} \times \underline{\quad} = \underline{\quad}$$



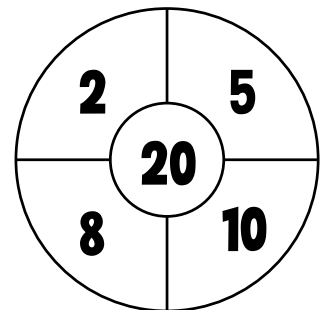
$$\underline{\quad} \times \underline{\quad} = \underline{\quad}$$



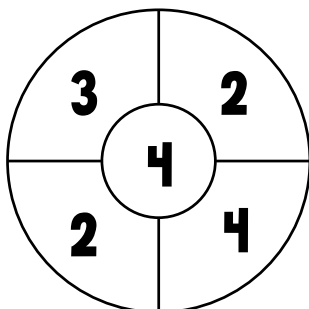
$$\underline{\quad} \times \underline{\quad} = \underline{\quad}$$



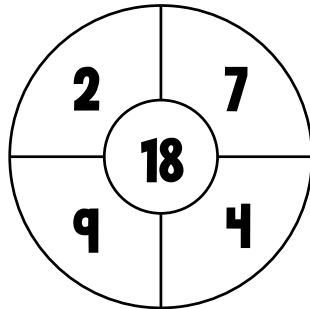
$$\underline{\quad} \times \underline{\quad} = \underline{\quad}$$



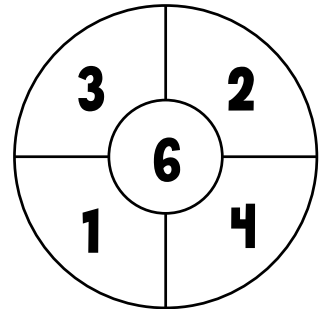
$$\underline{\quad} \times \underline{\quad} = \underline{\quad}$$



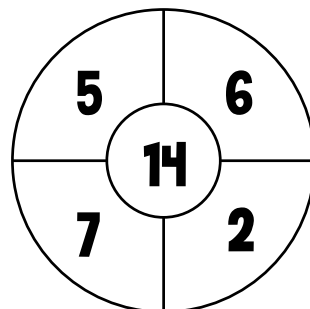

$$\underline{\quad} \times \underline{\quad} = \underline{\quad}$$




$$\underline{\quad} \times \underline{\quad} = \underline{\quad}$$



$$\underline{\quad} \times \underline{\quad} = \underline{\quad}$$

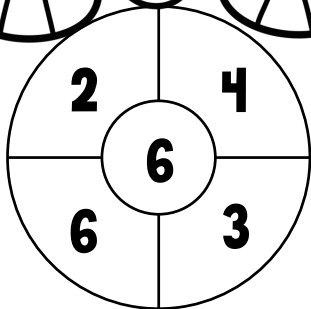


$$\underline{\quad} \times \underline{\quad} = \underline{\quad}$$

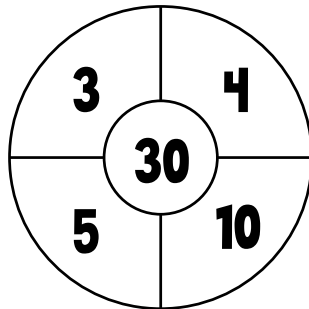


Strzał w dziesiątkę!

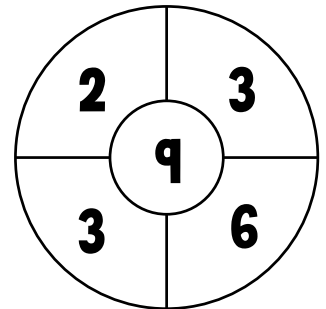
Pokoloruj pola z dwoma liczbami, które pomnożone przez siebie dadzą wynik zapisany na środku. Uzupełnij działania.



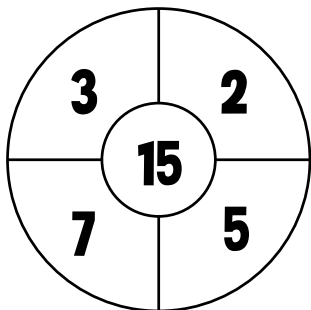
$$\underline{\quad} \times \underline{\quad} = \underline{\quad}$$



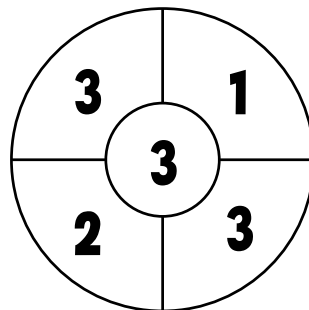
$$\underline{\quad} \times \underline{\quad} = \underline{\quad}$$



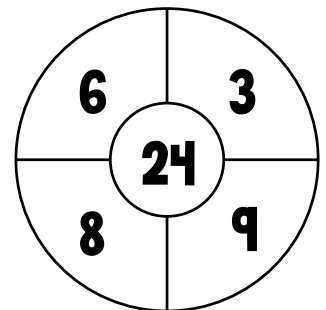
$$\underline{\quad} \times \underline{\quad} = \underline{\quad}$$



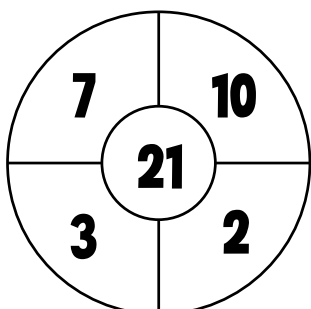
$$\underline{\quad} \times \underline{\quad} = \underline{\quad}$$



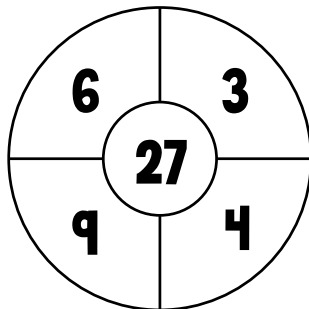
$$\underline{\quad} \times \underline{\quad} = \underline{\quad}$$



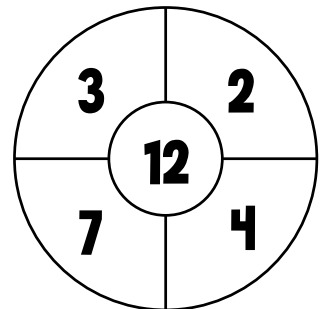
$$\underline{\quad} \times \underline{\quad} = \underline{\quad}$$



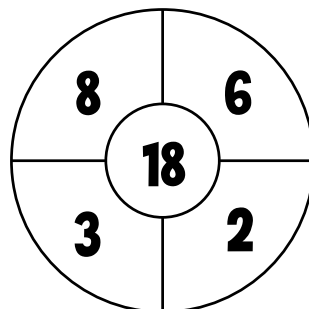

$$\underline{\quad} \times \underline{\quad} = \underline{\quad}$$




$$\underline{\quad} \times \underline{\quad} = \underline{\quad}$$



$$\underline{\quad} \times \underline{\quad} = \underline{\quad}$$

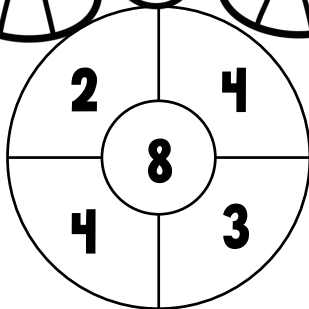


$$\underline{\quad} \times \underline{\quad} = \underline{\quad}$$

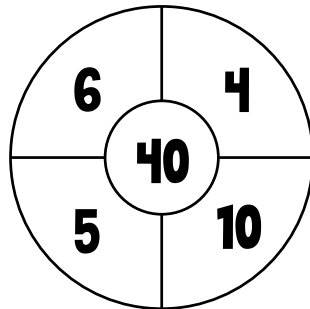


Strzał w dziesiątkę!

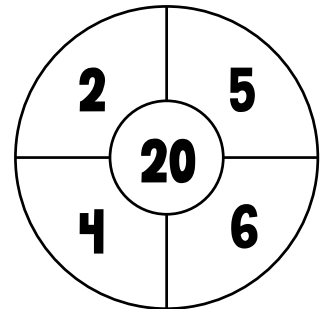
Pokoloruj pola z dwoma liczbami, które pomnożone przez siebie dadzą wynik zapisany na środku. Uzupełnij działania.



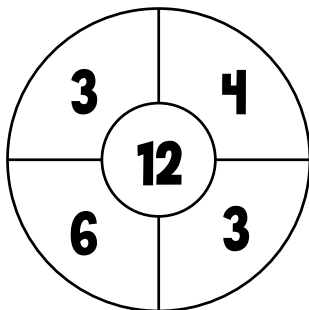
$$\underline{\quad} \times \underline{\quad} = \underline{\quad}$$



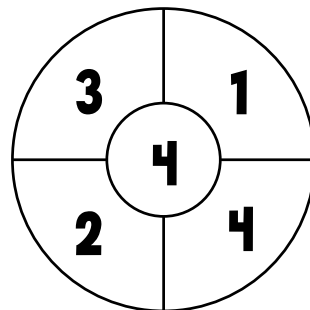
$$\underline{\quad} \times \underline{\quad} = \underline{\quad}$$



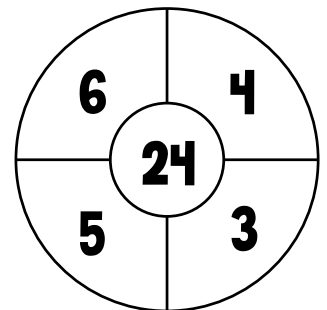
$$\underline{\quad} \times \underline{\quad} = \underline{\quad}$$



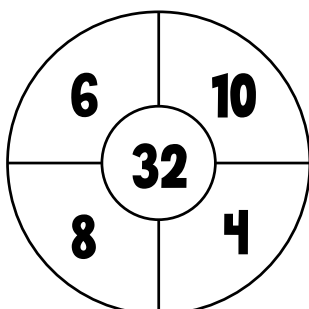
$$\underline{\quad} \times \underline{\quad} = \underline{\quad}$$



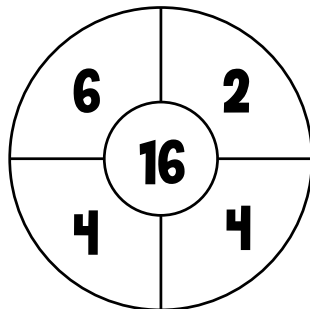
$$\underline{\quad} \times \underline{\quad} = \underline{\quad}$$



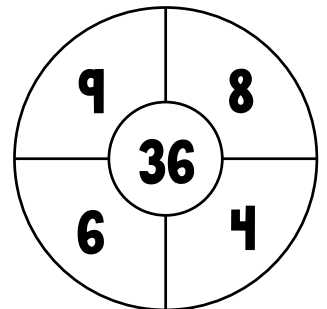
$$\underline{\quad} \times \underline{\quad} = \underline{\quad}$$



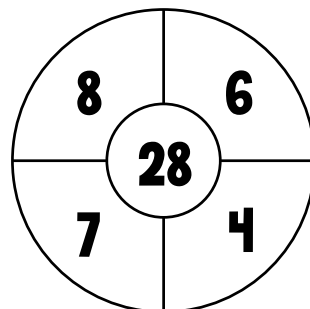

$$\underline{\quad} \times \underline{\quad} = \underline{\quad}$$




$$\underline{\quad} \times \underline{\quad} = \underline{\quad}$$



$$\underline{\quad} \times \underline{\quad} = \underline{\quad}$$




$$\underline{\quad} \times \underline{\quad} = \underline{\quad}$$

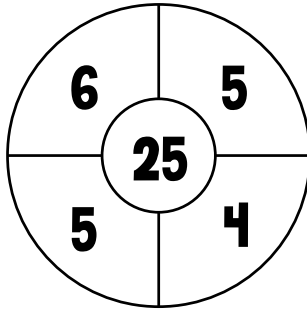


Strzał w dziesiątkę!

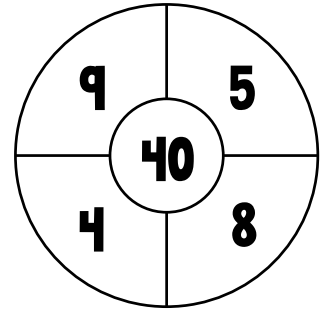
Pokoloruj pola z dwoma liczbami, które pomnożone przez siebie dadzą wynik zapisany na środku. Uzupełnij działania.



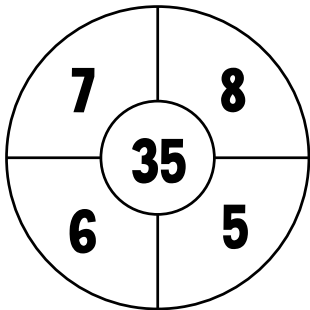
$$___ \times ___ = ___$$



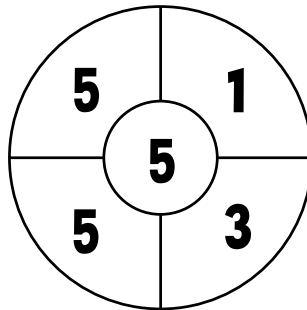
$$___ \times ___ = ___$$



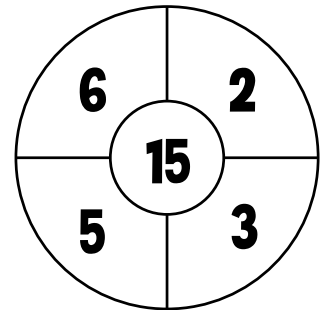
$$___ \times ___ = ___$$



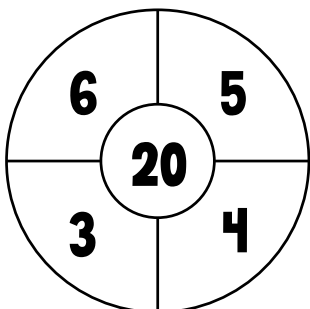
$$___ \times ___ = ___$$



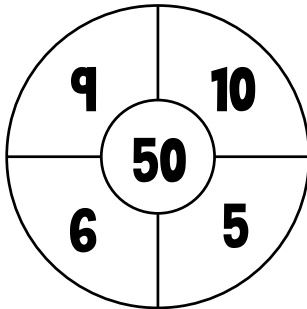
$$___ \times ___ = ___$$



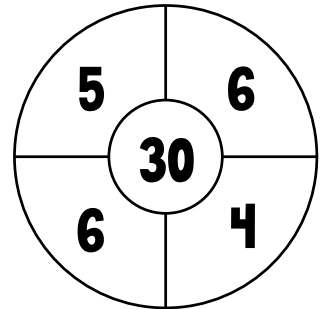
$$___ \times ___ = ___$$



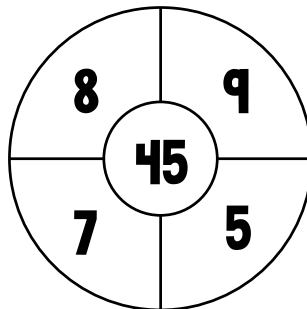

$$___ \times ___ = ___$$




$$___ \times ___ = ___$$



$$___ \times ___ = ___$$

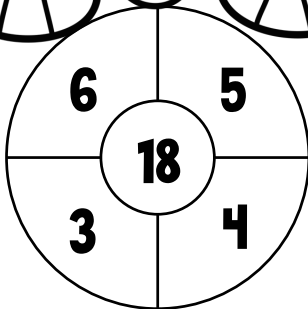


$$___ \times ___ = ___$$

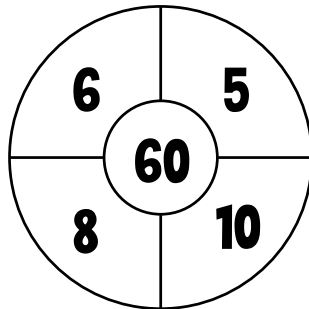


Strzał w dziesiątkę!

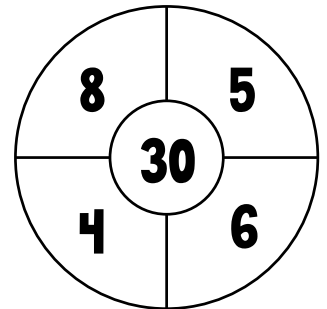
Pokoloruj pola z dwoma liczbami, które pomnożone przez siebie dadzą wynik zapisany na środku. Uzupełnij działania.



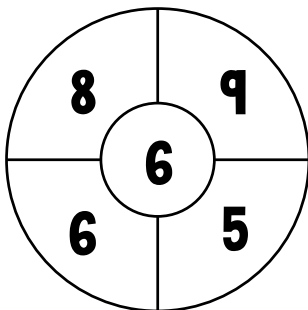
$$\underline{\quad} \times \underline{\quad} = \underline{\quad}$$



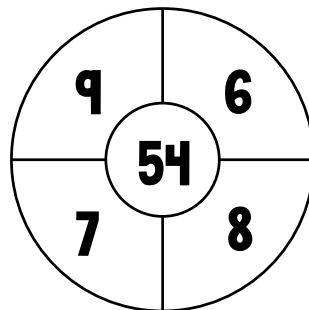
$$\underline{\quad} \times \underline{\quad} = \underline{\quad}$$



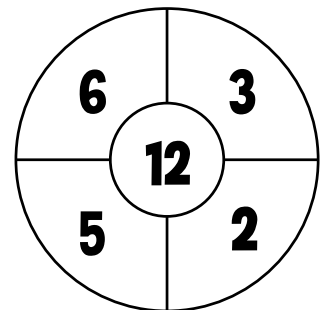
$$\underline{\quad} \times \underline{\quad} = \underline{\quad}$$



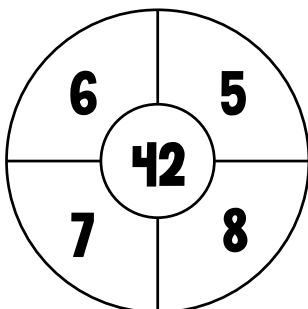
$$\underline{\quad} \times \underline{\quad} = \underline{\quad}$$



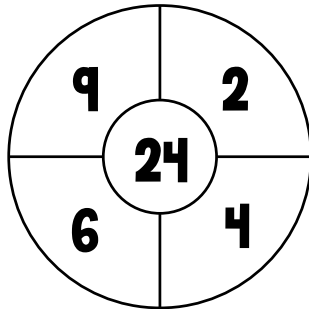
$$\underline{\quad} \times \underline{\quad} = \underline{\quad}$$



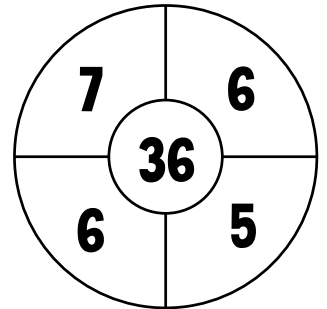
$$\underline{\quad} \times \underline{\quad} = \underline{\quad}$$



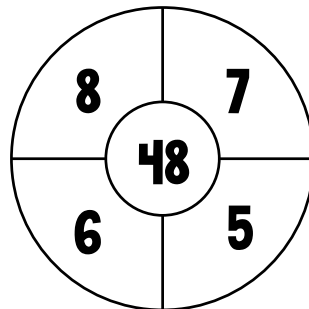

$$\underline{\quad} \times \underline{\quad} = \underline{\quad}$$




$$\underline{\quad} \times \underline{\quad} = \underline{\quad}$$



$$\underline{\quad} \times \underline{\quad} = \underline{\quad}$$

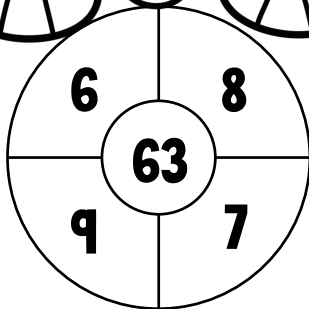


$$\underline{\quad} \times \underline{\quad} = \underline{\quad}$$

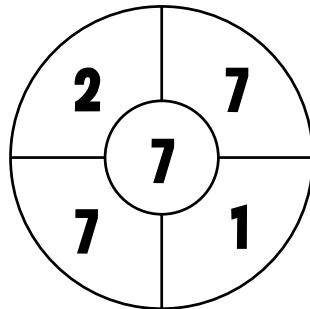


Strzał w dziesiątkę!

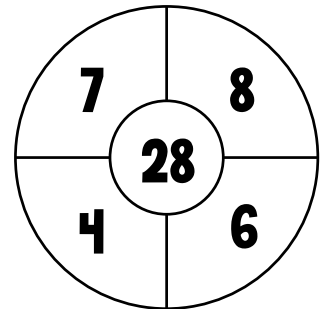
Pokoloruj pola z dwoma liczbami, które pomnożone przez siebie dadzą wynik zapisany na środku. Uzupełnij działania.



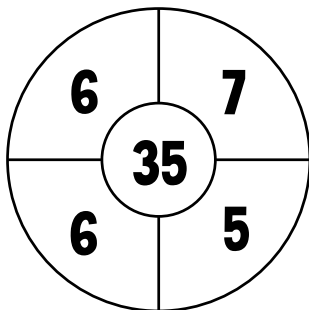
$$\underline{\quad} \times \underline{\quad} = \underline{\quad}$$



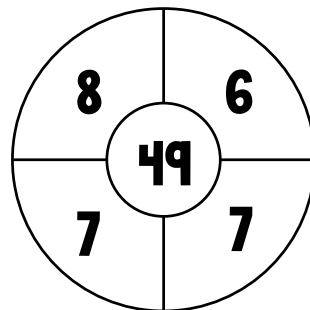
$$\underline{\quad} \times \underline{\quad} = \underline{\quad}$$



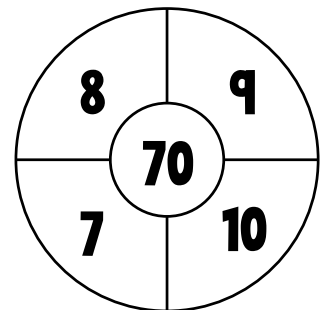
$$\underline{\quad} \times \underline{\quad} = \underline{\quad}$$



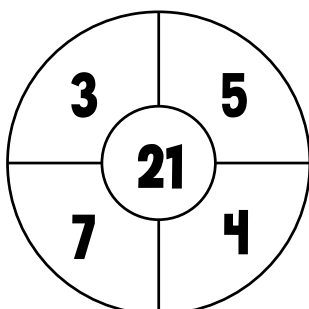
$$\underline{\quad} \times \underline{\quad} = \underline{\quad}$$



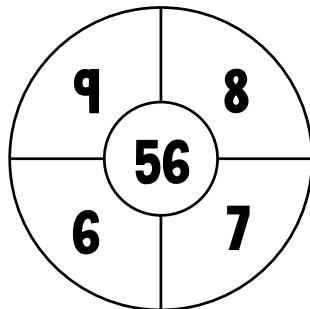
$$\underline{\quad} \times \underline{\quad} = \underline{\quad}$$



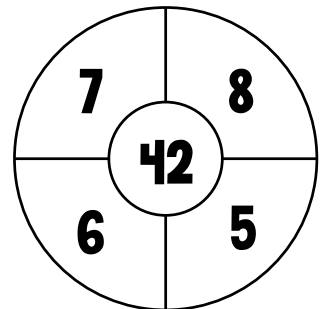
$$\underline{\quad} \times \underline{\quad} = \underline{\quad}$$



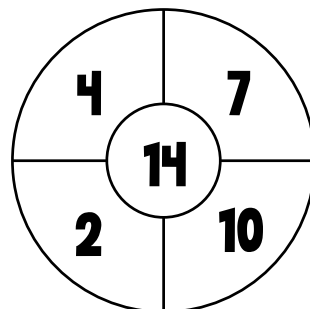

$$\underline{\quad} \times \underline{\quad} = \underline{\quad}$$




$$\underline{\quad} \times \underline{\quad} = \underline{\quad}$$



$$\underline{\quad} \times \underline{\quad} = \underline{\quad}$$




$$\underline{\quad} \times \underline{\quad} = \underline{\quad}$$

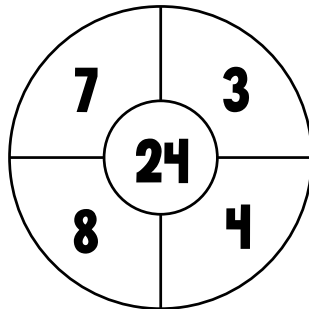


Strzał w dziesiątkę!

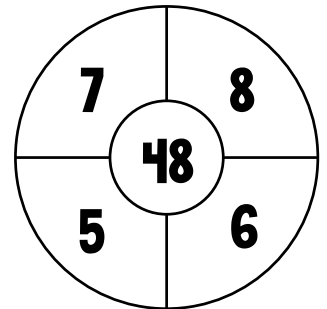
Pokoloruj pola z dwoma liczbami, które pomnożone przez siebie dadzą wynik zapisany na środku. Uzupełnij działania.



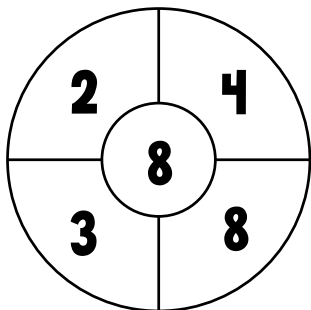
$$\underline{\quad} \times \underline{\quad} = \underline{\quad}$$



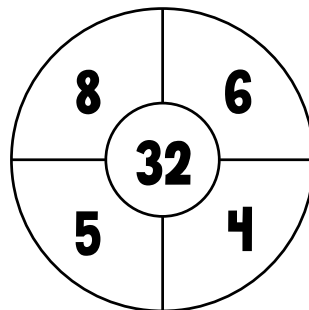
$$\underline{\quad} \times \underline{\quad} = \underline{\quad}$$



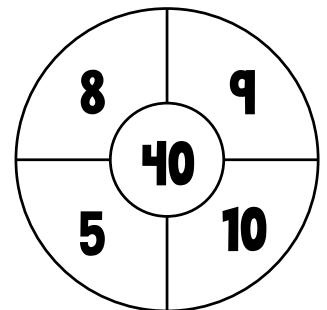
$$\underline{\quad} \times \underline{\quad} = \underline{\quad}$$



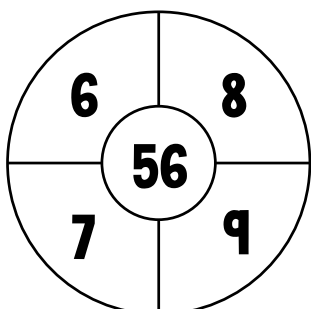
$$\underline{\quad} \times \underline{\quad} = \underline{\quad}$$



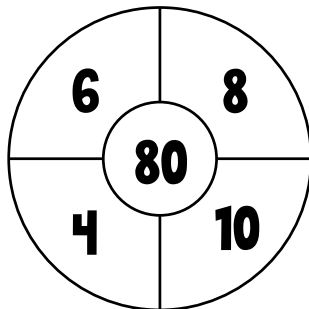
$$\underline{\quad} \times \underline{\quad} = \underline{\quad}$$



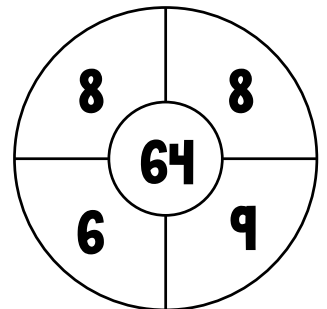
$$\underline{\quad} \times \underline{\quad} = \underline{\quad}$$



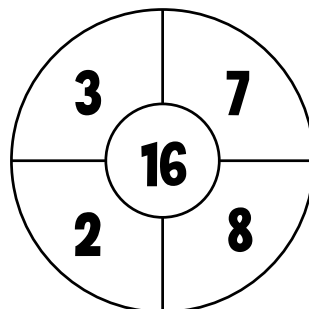

$$\underline{\quad} \times \underline{\quad} = \underline{\quad}$$




$$\underline{\quad} \times \underline{\quad} = \underline{\quad}$$



$$\underline{\quad} \times \underline{\quad} = \underline{\quad}$$

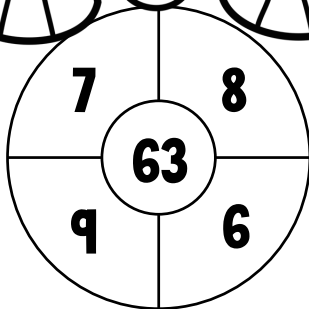


$$\underline{\quad} \times \underline{\quad} = \underline{\quad}$$

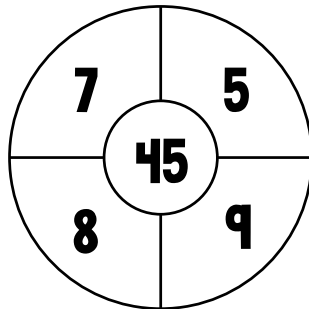


Strzał w dziesiątkę!

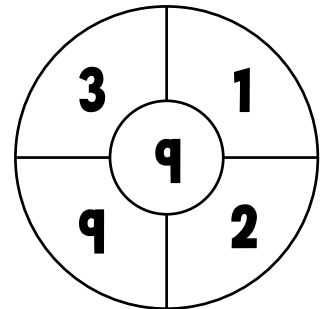
Pokoloruj pola z dwoma liczbami, które pomnożone przez siebie dadzą wynik zapisany na środku. Uzupełnij działania.



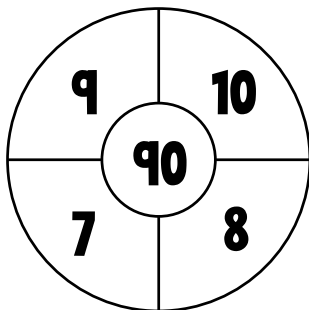
$$\underline{\quad} \times \underline{\quad} = \underline{\quad}$$



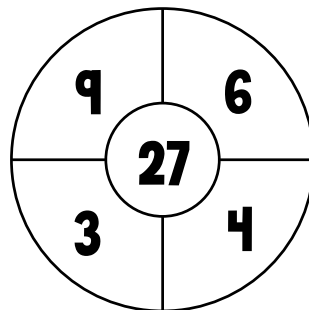
$$\underline{\quad} \times \underline{\quad} = \underline{\quad}$$



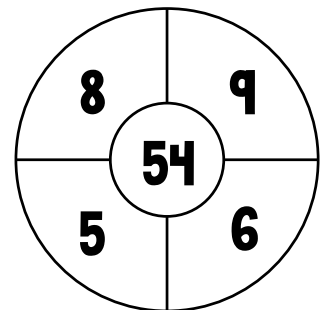
$$\underline{\quad} \times \underline{\quad} = \underline{\quad}$$



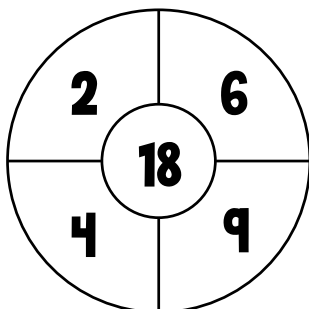
$$\underline{\quad} \times \underline{\quad} = \underline{\quad}$$



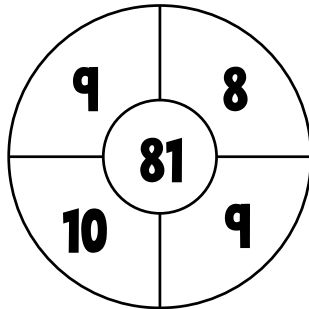
$$\underline{\quad} \times \underline{\quad} = \underline{\quad}$$



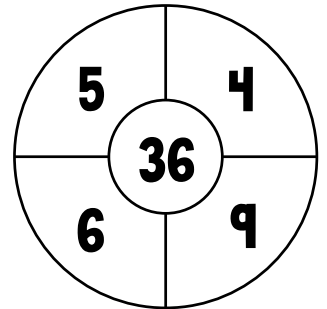
$$\underline{\quad} \times \underline{\quad} = \underline{\quad}$$



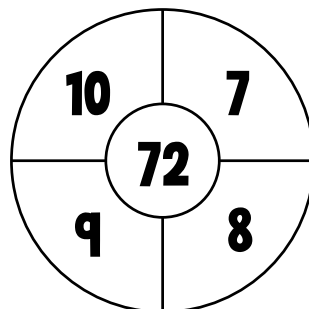

$$\underline{\quad} \times \underline{\quad} = \underline{\quad}$$




$$\underline{\quad} \times \underline{\quad} = \underline{\quad}$$



$$\underline{\quad} \times \underline{\quad} = \underline{\quad}$$

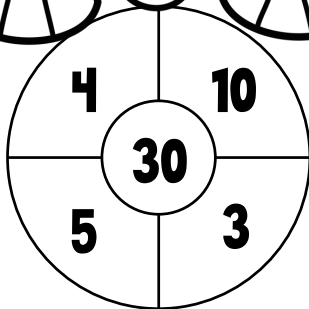


$$\underline{\quad} \times \underline{\quad} = \underline{\quad}$$

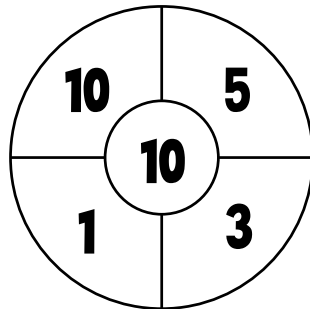


Strzał w dziesiątkę!

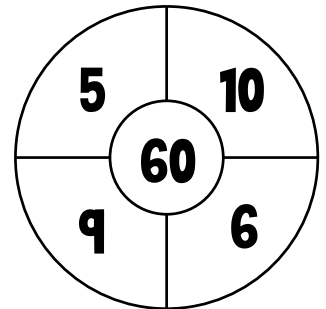
Pokoloruj pola z dwoma liczbami, które pomnożone przez siebie dadzą wynik zapisany na środku. Uzupełnij działania.



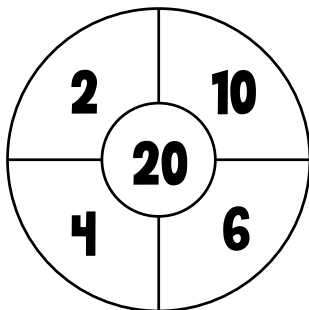
$$\underline{\quad} \times \underline{\quad} = \underline{\quad}$$



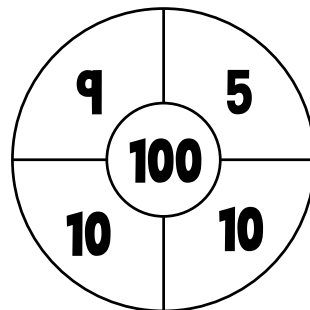
$$\underline{\quad} \times \underline{\quad} = \underline{\quad}$$



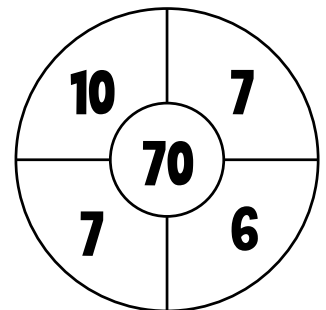
$$\underline{\quad} \times \underline{\quad} = \underline{\quad}$$



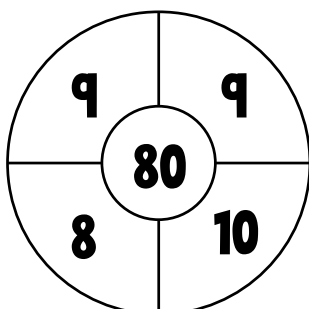
$$\underline{\quad} \times \underline{\quad} = \underline{\quad}$$



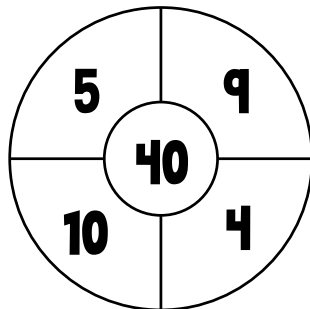
$$\underline{\quad} \times \underline{\quad} = \underline{\quad}$$



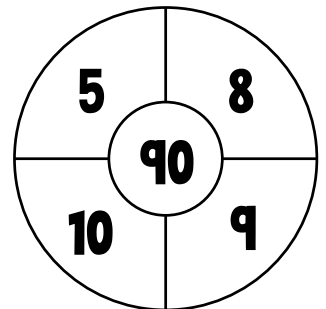
$$\underline{\quad} \times \underline{\quad} = \underline{\quad}$$



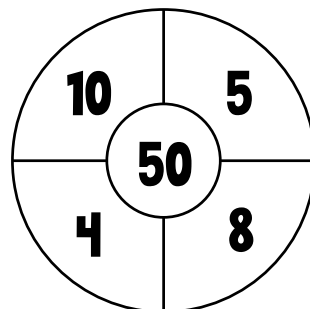

$$\underline{\quad} \times \underline{\quad} = \underline{\quad}$$



$$\underline{\quad} \times \underline{\quad} = \underline{\quad}$$



$$\underline{\quad} \times \underline{\quad} = \underline{\quad}$$



$$\underline{\quad} \times \underline{\quad} = \underline{\quad}$$

